

KENDRIYA VIDYALAYA AFS SULUR
HOLIDAY HOMEWORK
CLASS III

LEARN AND WRITE THE WORDS IN TAMIL , HINDI AND ANY OTHER REGIONAL LANGUAGE

YOUR NAME , GOOD MORNING , WELCOME , THANK YOU

ENGLISH

READING

Read the given passage carefully and answer the following questions:

I am a caterpillar
Though small, I'm strong as pillar.
My name is Babbage
Today my food is a cabbage.
I am soft and green
The cabbage is crisp and green.
I am on my merry walk
I enjoy eating without any talk
I live, eat and sleep in the cabbage
But no one can find Babbage in the cabbage!

1. What is crisp and green?
a. Cabbage b. Babbage c. Jabbage
2. Whom does 'I' refer to in the passage?
a. Jabbage b. Dabbage c. Babbage
3. Babbage is _____
a. Soft and green b. Crisp and green c. Hard and green
4. The caterpillar enjoys _____
a. Talking and eating b. Walking and eating c. Eating without talking
5. Babbage goes on _____ walk.
a. Happy b. Merry c. Sad
6. _____ is small and strong as a _____ .
7. Who can find Babbage?

8. Where does Babbage sleep?

PROSE / POETRY

1. Who helped the old man to pull up the enormous turnip?

2. How high can balloons fly?

3. Name any two places where the butterfly rested.

4. Which was the other bird with blue Jay in the poem 'Bird Talk'

GRAMMAR

1. Punctuate and rewrite the following sentence.

how many people are there in your family -

2. Circle the action word in the given sentence.

a) We always eat dinner together.

3. Underline the describing word in the given sentence.

a) Kolkata is a big city.

4. Circle the naming words in the sentence.

a) Do you play basketball?

b) Teena sat on the sofa.

5. Rearrange the following words to make a sentence.

a) Meena / new dress / a / bought

6. Write the plural of the following:

a) Potato - _____

7. Write the compound word -



+



=

8. Complete the sentences using is / are:

- a. A train _____ coming.
- b. Some monkeys _____ jumping.

9. Write past tense of the given word.

- a) I _____ a movie on Sunday. (watch)

10. Write the full form of:-

- a) Don't - _____
- b) Can't - _____

SPELLING

1. Circle the correct spelling.

- a. Wuman Woman voman
- b. Cold kold Chold

2. Replace the first letter with another letter and make a new word.

- a) Root - _____
- b) Ball - _____

3. Rearrange the jumbled letters and make a word.

- a) pnki - _____
- b) tunrk - _____

4. Fill in the blanks with suitable letters-

- a) Ra__it
- b) spa__ows

5. Correct the wrongly spelt word and rewrite the sentence.

A yallow butterfly flew around the garden.

VOCABULARY

1. Write a rhyming word for-

Sail - _____

2. Circle the word which starts with /k/ sound-

monk cat girl bend

3. Write the collective noun: -

A _____ of sticks. (bundle / pride)

A _____ of shoes. (bouquet / pair)

4. Arrange the following words in alphabetical order.

a) Sparrow, Chocolate, Beetroot - _____

5. Write the opposite of -

Fat x _____

6. Name the birds which make the following sounds: -

a) caw caw _____ b) quack quack _____

7. Write the word which means the following:

a) move quickly and lightly - _____

CREATIVE WRITING

Write five sentences about the given picture.



HANDWRITING

Once, there was a crow. He was very thirsty. He wandered here and there in search of water. But he was nowhere to be found. Finally, he went to a garden. There he saw a pitcher of water. The water level was very low. The crow could not drink it. He started thinking of a plan. He saw some pebbles from afar. He picked them up. Then he dropped them in the pitcher. The water level rose. Then the crow could drink water.

Moral: Where there is a will, there is a way.

HINDI

१. गद्यांश को पढ़कर प्रश्नों के उत्तर दीजिए।

होली बसंत ऋतु में मनाया जानेवाला भारतीय त्यौहार है। होली रंगों का त्यौहार है। इस दिन लोग एक दूसरे पर खूब सारे रंग लगाते हैं। लोग खूब नाचते और गाते हैं। हर घर में गुजिया, दही बड़े, पापड़, हलवा इत्यादि मिठाइयां बनाई जाती हैं। होली उत्सव के एक दिन पहले होलिका का दहन किया जाता है। होली उत्तर भारत में मनाया जाता है। इस त्यौहार से प्यार और भाईचारा बढ़ता है।

१. होली कब मनाया जाता है ?

२. होली किस चीज़ का त्यौहार है ?

३. होली में लोग क्या करते हैं ?

४. कौन नाचते और गाते हैं?

५. इस दिन घर में क्या क्या बनाया जाता है ?

६. होली के एक दिन पहले क्या किया जाता है ?

७. होली भारत में कहां मनाया जाता है?

८. इस त्यौहार से क्या होता है ?

९. इस गद्यांश के लिए उचित शीर्षक दीजिए। _____

१०. आपको कौन सा त्यौहार पसंद है ? _____

लेखन

प्रश्नों के उत्तर दीजिए।

1. बिल्लियां आपस में किस लिए लड़ रही थीं? अंत में किसने दोनो बिल्लियों की लड़ाई का फायदा उठाया ?

2. सारा गांव क्यों परेशान था ? बुढ़िया के झोपड़ी के पीछे कौन छिपा था ?

3. किस पक्षी की आवाज़ मिसरी जैसी होती है ? भारत का राष्ट्रीय पक्षी क्या है ?

व्याकरण।

1. दिए गए शब्दों का वचन बदलो।

कुत्ता _____। तितली _____

2. दिए गए शब्द का विलोम शब्द लिखो।

मोटा। × _____

3. दिए गए शब्द का अन्य लिंग लिखो।

घोड़ा _____

4. कामवाले शब्द पर गोला करो।

राहुल किताब पढ़ रहा है।

5. मुहावरे का अर्थ पहचानो और गोला करो।

नौ दो ग्यारह होना (अंदर आना, भाग जाना, गिर जाना , गोला होना)

मंद मंद मुस्कराना। (चिल्लाना, बातें करना , धीरे धीरे हंसना, डरकर भाग जाना)

6. नामवाले शब्द पर गोला लगाओ।

रमेश सो रहा है।

7. वाक्य में प्रयोग करो।

क. किसान _____

ख. मक्खी _____

8. वाक्य में से नुक्ता शब्द पहचानो और गोला करो।

मुझे बाज़ार जाना है।

९. भिन्न शब्द पर गोला करो ।

स्कूल , अध्यापक , कक्षा , सिनेमा

१०. सही शब्द चुनकर वाक्य पूरा करो ।

पिताजी ___ दुकान से चीनी लाने को कहा। (को, ने, से सी) ।

वर्तनी

१. सही शब्द पर गोला लगाओ।

पहलवान। पलावन। पिहिलवान

२. सही स्थान पर "ए" की मात्रा लगाओ।

शखीबाज

३. शब्दों को वर्णमाला के क्रम में लगाओ।

शरारत चालक कबूतर। फसल

४. वाक्य में से अनुस्वार शब्द पर गोला करो ।

गीता बाज़ार से अंडे ला रही है।

५. वाक्य में से अनुनासिक शब्द पर गोला करो।

ऊंट रेगिस्थान में पाए जाते हैं।

६. सही स्थान पर ऊ की मात्रा लगाओ ।

रमाल

७. इन अक्षरों को सही क्रम में लगाकर अर्थपूर्ण शब्द बनाओ।

ह वा प ल न _____

८. "ल्ल" संयुक्त अक्षर से शब्द बनाओ। _____

९. वर्तनी शुद्ध कीजिए।

पंडीत _____

बूडिया _____

१०. शब्द को पूरा करने के लिए सही विकल्प चुनिए ।

चा __ दी __ री। (री, वा) (बा, रि) (र , वा)

शब्दावली।

१. पर्यायवाची शब्द लिखो ।

क. सूर्य _____ । २. जल _____

२. शब्द का अर्थ लिखो ।

मुसीबत

३. जो इन कार्यों को करता है इन्हें क्या कहते हैं ?

. जो कपड़े धोता है _____

. जो खेतों में काम करता है _____

४. दिए गए शब्दों को सही क्रम में लगाकर अर्थपूर्ण वाक्य बनाइए ।

बंद , बारिश , है, के , स्कूल, कारण । _____

५ मिलते जुलते शब्द लिखो।

आना _____


गीला _____

६.. आप सामान कहां से खरीदते हो ? _____ (मकान, दुकान)

७. दिए गए वाक्य के लिए एक शब्द लिखो ।

* धूप देती है _____ । छांव देती है _____

८. चित्र पहचानकर नाम लिखो।



क्रियात्मक लेखनी

चित्र देख कर पांच वाक्य लिखो।



सुलेख।

मेरा भारत महान है। भारत में विभिन्न भाषाएं बोली जाती हैं। भारत में अनेकों प्रदेश हैं। इन प्रदेशों के अपने ही पकवान हैं। सब

एक से बढ़कर एक , बड़े ही स्वादिष्ट हैं। कुछ मसालेदार तो कुछ नमकीन। विदेशियों को भी भारतीय पकवान बड़े ही पसंद हैं।

भारत में बहुत सारे पर्यटक स्थल हैं ।

EVS

OBSERVATION

1 .Observe the picture and write the answer .



- The insect can make us sick _____.
- _____ main source of water .
- when we go for camps we stay in _____ house.
- Deaf and dumb people use _____ language .

2. Tick the activities :-

a) which you can do without water .



b) What are the utensils not used for drinking .



c) Which tree does not have branches .



d) Which vehicles use fuel .



3. Write the names of food items that prepared from rice .



a) _____

b) _____

4. Name two animals live in tree .


a) _____

b) _____

IDENTIFICATION

I.

A .circle the odd one



B. Choose the correct answer from the given words .

1. Solid form of water _____ (gas ,ice)
2. Mother 's brother is _____ (uncle ,cousin)
3. A house made on boat _____ (cottage , house boat)

II. Write the name of the people who use these tools .



A. _____
 B. _____

III . How do you keep your surroundings clean ?

- i) _____
- ii) _____

IV. Classify the following means of transport .

train ,sledge ,helicopter ,camelcart ,aeroplane ,bicycle
 ,bullock cart ,ship

Vehicles used for long distance	Vehicles used for short distance

V

A. Unjumble the letters to get the correct word .

(4x1=4)



1. H P U M A N D P

2. O U R V A P

B. Find the names of two helpers in the grid .

d	o	c	t	o	r	q	v	c
b	a	r	b	e	r	m	s	o
a	e	l	a	w	y	e	r	b
c	u	d	c	f	o	k	n	b
b	j	o	h	z	i	g	b	l
e	l	p	e	c	l	n	f	e
r	w	y	r	e	s	t	g	r

1. He mends shoes .

2. Treats people who are sick .

DISCOVERY OF FACTS

1. Match the following

A

B

a. flower

milk product

b. Bees

student

c. Bricks , cement

can't walk

d. school

hive

e. lame

permanent house

f. Curd

decoration

2. Write two utensils with wooden handle ,why wooden handles are used in cooking utensils ?

a. _____

b. _____

3. Why many people are not using Air Transport ? Will the space travel become easy ,fast and cheap ?

a) _____

b) _____

3. Rema's grany told there were animals which they have seen when they were children but not seen these days .



(4x1=4)

A .Draw any one of those animals write its name .



i) _____

B. She also shown the picture of some animals which are not there in the world now .colour those animals .



4 .

A. Name two food items which can be prepared without cooking .

i. _____

ii. _____

B. Write the procedure for preparing lemon juice .

Step 1:

Step 2:

Step 3:

MATHS

Very Short answers

I. a) Write the number name.

816 _____

b) The largest 3- digit number is _____

c) 1 week = _____ days.

d) $435 = 4$ hundreds _____ tens and _____ ones.

Very short answers (2x1=2)

II. a) Write any two letters of English alphabet which can be divided into mirror halves.


b) What comes before and after the given number.

768

Short answers (2x1=2)

III. a) Draw a Rectangle, count its corners and write the number of corners.

b) Use a scale and measure the length of the given object.



Long answer (1x4=4)

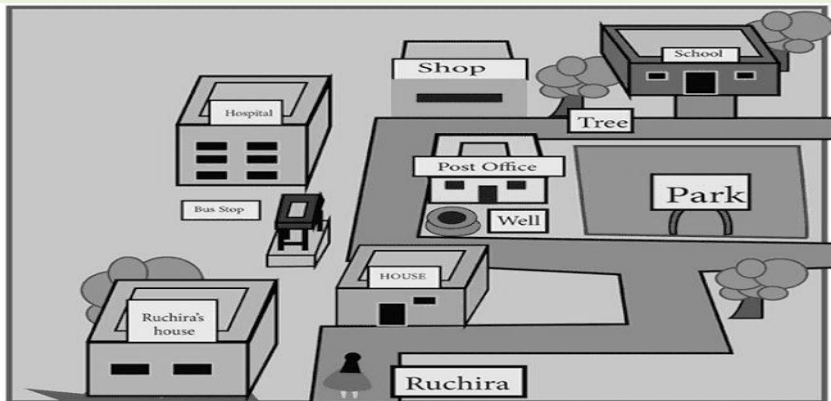
IV. Look at the figure given below and answer the questions.

i) What is in front of Ruchira? (House / Park)

ii) What is in between School and Shop? (Well / Tree)

iii) Which is closer to the Bus Stop? (Hospital / School)

iv) If Ruchira walks through the road and turns right, where will she reach? (Shop / Park)



Understanding Basic Concepts

Very short answers (4x1/2=2)

I. a) Length of sari can be measured in _____ (centimeter, minute).



b) The long hand of a clock is _____ (hour / minute) hand.

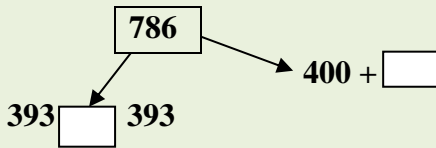


c) The battery cell is in the shape of _____ (circle / cylinder).

d) If you add 100 to _____ you get the highest 3- digit number.

Very short answers (2x1=2)

II. a) Fill in the boxes.



b) Complete the pattern.



Short answers (2x1=2)

III. a) Arrange the numbers in the ascending order.

900 , 585 , 640 , 673 , 218

b) If $\square = 100$, $\triangle = 10$, $\bigcirc = 1$, Show the number 425.

Long answers (1x4=4)

IV. Observe the given calendar and answer the following questions.

JANUARY 2023						
SUN	MON	TUE	WED	THU	FRI	SAT
1	2	3	4	5	6	7
8	9	10	11	12	13	14
15	16	17	18	19	20	21
22	23	24	25	26	27	28
29	30	31				

- i) How many Mondays are there in January, 2023? _____
- ii) What day of the week is 29th January? _____
- iii) How many days are there in January? _____
- iv) What is the date on Second Saturday? _____

ABILITY TO COMPUTE

Very short answers (4x1/2=2)

I. a) $10 + 64 =$ _____

b) If today is Friday, then tomorrow will be _____.

c) Jump 5 steps forward

115 , 120 , 125, _____ , _____

d) What is the total amount? _____



Short answers (4x1=4)

II. Solve these.

a. $355 + 428$

b. $963 - 728$

c. $678 - 429$

d. $595 + 283$

Long answers (1x4=4)

III. Sanjay owns a Sports shop. He sold:

(4)

	Football	Basketball
May	108	123
June	184	147


Answer the following.

- a) Total number of balls sold by Sanjay in May is _____.
- b) Total number of footballs sold by Sanjay in May and June is _____.
- c) Total number of basketballs sold by Sanjay in May is _____.
- d) The difference between basketballs sold in June and basketballs sold in May is _____
basketballs.

PROBLEM SOLVING ABILITY

Short answers (2x1=2)

I. a) Count and write how many Triangles are there.



b) Split and add.

$$84 + 14$$

Long answers (1x4=4)

II. Observe the table and find the answer of the questions given.

PLAYER	RUNS SCORED
Sachin	128
Sehwag	100
Dhoni	152
Gambhir	120
Virat	160

i) _____ scored a century, no less, no more.



★ ii) _____ and _____ have difference of 20 runs between them.

★ iii) _____ scored the highest runs.

★ iv) _____ missed the double century by 40 runs.



★ Long answers (1x4=4)

★ III. There are 489 eggs with a shopkeeper. Another 380 eggs are given to him.



★ How many eggs does the shopkeeper have now?



★ From the totals eggs, the shopkeeper found that 469 eggs were broken. How many eggs are



★ **Prepare Flash Cards (Post card size) numbers 0 to 9**



★ ***Prepare 1 Addition and 1 Subtraction(3-digit) operation question in a A4 size card and cover it neatly with a plastic cover.**



Example: 428 643

-218 +312

