

**KENDRIYA VIDYALAYA AFS SULUR**  
**HOLIDAY HOMEWORK**  
**CLASS IV**

**LEARN AND WRITE THE WORDS IN TAMIL , HINDI AND ANY OTHER REGIONAL LANGUAGE**

**YOUR NAME , GOOD MORNING , THANK YOU, WELCOME , HOW ARE YOU**

ENGLISH

READING COMPREHENSION

- I. Read the following passage and answer the questions given below: (6 x ½=3, 2x1=2) 5m
- A Tornado is an extremely dangerous form of weather. It is actually a rotating tube of air that touches the ground and clouds at the same time. They are called twisters because they keep rotating. It is a dark funnel shaped cloud that reaches from the sky to the ground. They are said to be dangerous form of weather because they travel up to 300 miles per hour! Tornadoes form when warm air and cool air meet in the sky. These columns of wild air can pick up cars, uproot trees, and knock over buildings. Tornadoes also bring about some advantages to the environment. They provide a lot of nitrogen to the soil as well as water to the plants. Tornadoes, with their massive movement, aid in seed pollination.
1. What is the name given to Tornado because of their rotating movement?  
\_\_\_\_\_
  2. How fast can a Tornado travel?  
\_\_\_\_\_
  3. What happens when warm air and cool air meet in the sky?  
\_\_\_\_\_
  4. Pick out the words that describe air from the passage.  
\_\_\_\_\_
  5. Bring out the description of tornado mentioned in the passage.  
\_\_\_\_\_
  6. Give a suitable title for the passage.  
\_\_\_\_\_
  7. What are the causes of a Tornado?  
\_\_\_\_\_
  8. Imagine a week back you encountered a tornado in your place, how would it help the people of your place? (1)  
\_\_\_\_\_  
\_\_\_\_\_

II. Answer the following questions:

1. If there is no clock in the house to wake you up in the morning, how will you wake up?

---

---

2. What does the poet want us to do at night?

---

---

3. Why did Nasruddin take someone else's name each time he missed the target?

---

---

4. Imagine a child who is with low vision, bring about the ways he could learn words?

---

---

III. Grammar

1. Look at these pair of words and fill in the blanks accordingly

Seen, unseen; Patient, \_\_\_\_\_; \_\_\_\_\_, unimportant

2. Write the **full form** of-

a) Won't \_\_\_\_\_ b) they're \_\_\_\_\_

3. Underline the **describing words** in the sentence

a) She is a beautiful girl b) Sita is a graceful dancer.

4. Fill in the blanks with correct form of word

Andi is 165 cm tall. Donna is 167 cm tall. So, Donna is \_\_\_\_\_ than Andi.

a) Bigger b) shorter c) smaller d) taller

5. Fill the blanks with correct **preposition**

a) The jet is hiding \_\_\_\_\_ the clouds (behind/under)

6. **Punctuate** the sentence

ma who woke me up today.

---

7. Rewrite the pair of sentences using '**and**' or '**but**'

Horse is not dangerous. Lion is dangerous.

---

8. Complete the sentence using **was** or **were**

a) My toys \_\_\_\_\_ broken.

b) Ram \_\_\_\_\_ a good football player.

9. **Frame questions** for the sentences

a) Alice jumped into the rabbit hole.

---

b) No, the mechanic didn't come to check the car.

---



10.

What is the action that is going on in this picture? \_\_\_\_\_

IV. Spelling

10 x 1/2 = 5 marks

1. Rearrange the jumbled letters into meaningful words:

a) c h y e a r r \_\_\_\_\_

2. Circle the word with correct spelling:

a) snugles      b) snuggles      c) snnugles

3. Complete the spelling:

a) W a \_ s t c \_ a t

4. fill in the blanks with ee or ea to complete the words:

a) r \_ \_ c h

5. Encircle the silent letter:

a) k n e a d

6. Find the word which cannot be formed using the letters from **ENTERTAINMENT**

a) meet b) shell c) enter d) terminate

7. Replace a letter in **CLOCK** to get a herd of animals \_\_\_\_\_

8. Underline the wrongly spelt word.

Nasruddin was defanding himself each time he missed the target.

9. Fill in the blanks by rearranging the word given in the bracket

Helen Keller's parents loved her \_\_\_\_\_ ( d r l e a y )

10. Find the hidden words

R	R	C	G	I	M
G	U	I	O	N	I
E	D	O	W	O	R
T	I	J	E	G	R
S	A	B	I	K	O
M	E	A	D	O	W

a. a large area of grassland \_\_\_\_\_

V. Vocabulary

10 x 1/2 =5 marks

1. Fill in the blanks with words of similar sound for the words in bold.

a) My grandmother wouldn't **cease** buying chocolates for me, so I lost a \_\_\_\_\_ of my tooth.

2. Mailbox

Separate the above-mentioned word into two meaningful parts and make sentence with each part of that word.

\_\_\_\_\_

\_\_\_\_\_



3. Give one suitable word for the picture. The first letter is already given. W \_\_\_\_\_

4. Choose the correct word

Our baseball team was ahead by \_\_\_\_\_ (**won/one**) point

5. Rewrite the sentence using opposite of the underlined word

This glass of milk is full  
\_\_\_\_\_

6. choose the most appropriate word

**A Spring of water**

a) almirah b) lake c) fountain d) valley

7. Give one word which is the **opposite of war** \_\_\_\_\_

8. Complete the sentence, choosing the right word.

The sum was \_\_\_\_\_ difficult for the class to solve. Only \_\_\_\_\_ students could do it (**two, too**)

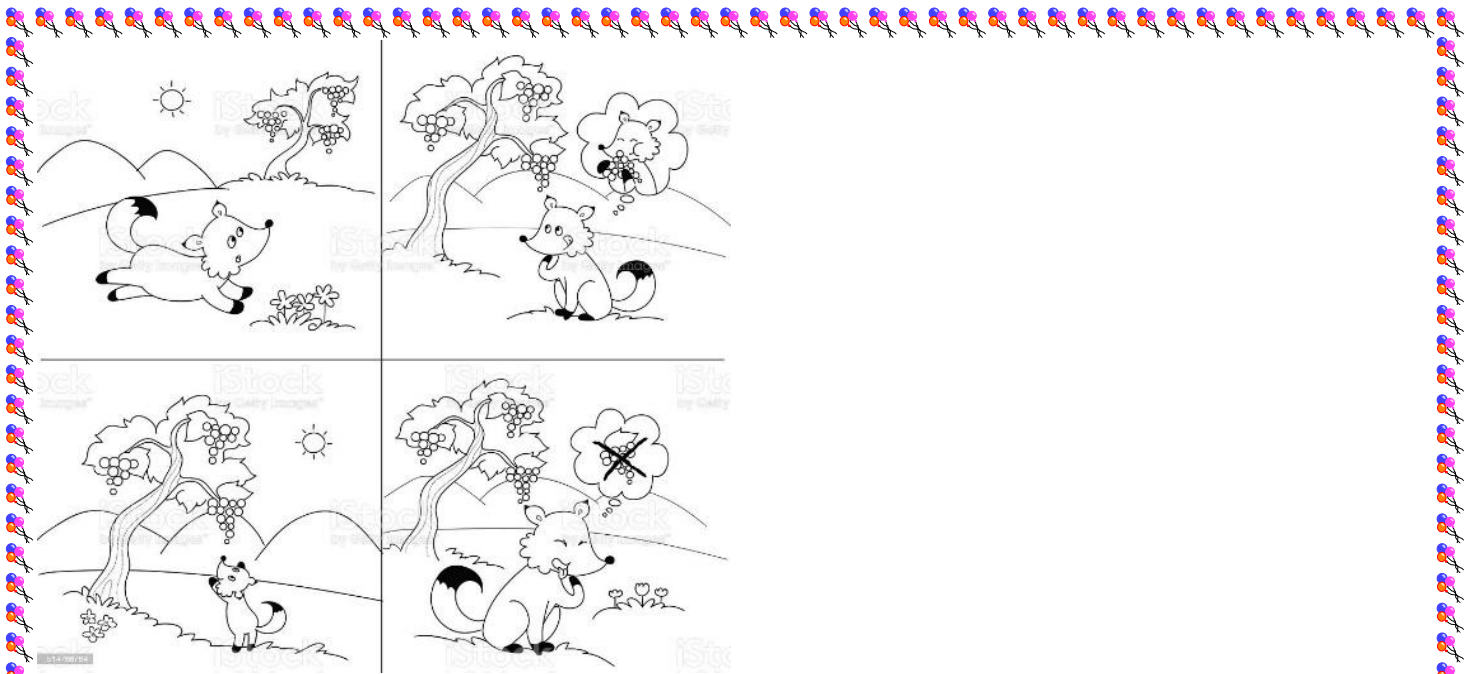
9. Find one word that means **to be seen nowhere** , \_\_\_\_\_

10. What do we call a person with magical powers as? \_\_\_\_\_

VI. Creative writing

5 marks

Spin a tale from the given sequence of pictures



---

---

---

---

---

---

---

---

---

---

VII. Handwriting

5 marks

It is rightly said that being disciplined is essential in life. When a person leads a disciplined life, they set an easy path to success. They will develop an approach to happiness and a beautiful future ahead. Being disciplined is the practice of having a scheduled daily routine which helps an individual to be punctual and hard-working.

---

---

---

---

---

---

---

---

---

---

## HINDI

गद्यांश को पढ़कर प्रश्नों के उत्तर दीजिए। (5)

एक बहुत गरीब और मेहनती मछुआरा था। वह एक अच्छा इंसान था। जिसने कभी किसी को को धोखा नहीं दिया था। उसने एक दिन दोपहर के समय समुद्र में मछली पकड़ने के लिए और अपना जाल डाला। उसने जाल को जमीन पर खींचने की बहुत कोशिश की, लेकिन वह खींच नहीं सका क्योंकि जाल भारी हो गया था, तब वह पानी में गया और उसे ऊपर ले आया। उसने जाल खोला तो उसे एक सोने का घड़ा मिला, घड़े को खोलने पर सोने के सिक्के मिले। जिससे वह अमीर तो हुआ लेकिन स्वार्थी नहीं। उसने अपने गांव में एक मंदिर बनवाया और सभी सोने के सिक्के मंदिर के खजाने में दान कर दिए।

1. मछुआरा कैसा इंसान था ?

उत्तर \_\_\_\_\_

2. वह समुद्र के किनारे क्यों गया?

उत्तर \_\_\_\_\_

3. वह अपना जाल क्यों नहीं खींच सका ?

उत्तर \_\_\_\_\_

4. मछुआरा ने सोने के सिक्के का क्या किया?

उत्तर \_\_\_\_\_

5. जो रोजगार के रूप में मछली पकड़ता है –

उसे \_\_\_\_\_ कहते हैं।

6. मछली पानी के बिना क्यों नहीं रह सकती ?

उत्तर \_\_\_\_\_

7. अगर आपको सोने का घड़ा मिलता तो आप क्या करते ?

उत्तर \_\_\_\_\_

8. गद्यांश का उचित शीर्षक लिखो।

उत्तर \_\_\_\_\_

## लेखन

### प्रश्नों के उत्तर दीजिए।

1. बादल कैसे शैतानियाँ करते हैं?

उत्तर \_\_\_\_\_

2. नाव बनाने के लिए पैसा कहाँ से आएगा ?

उत्तर \_\_\_\_\_

3. ख्वाजा ने कितने प्रश्न लिखकर बादशाह को दिए ?

उत्तर \_\_\_\_\_

4. राज्य में लोग भूखे क्यों मरने लगे थे ?

उत्तर \_\_\_\_\_

## व्याकरण

1. संज्ञा शब्द पर गोला लगाओ।

(½)

“ बहुत अच्छा!” गांधीजी ने धीरे से कहा।

2. दिए गए वाक्य में सर्वनाम शब्द पर गोला लगाओ।

(½)

“ कुछ देर तो वह बिस्तर पर ही सो रही थी। ”

3. दिए गए वाक्य में से विशेषण शब्द पर गोला लगाओ।

(½)

हुदहुद एक सुन्दर पक्षी है।

4. दिए गए वाक्य में क्रिया शब्द पर गोला लगाओ।

(½)

पिताजी सुबह अखबार पढ़ते हैं।

5. नीचे दिए गए वाक्य में उचित विराम चिह्न लगाओ।

(½)

तुम्हारा नाम क्या है \_\_\_\_\_

6. मुहावरे का अर्थ लिखो।

छक्के छूटना \_\_\_\_\_

7. निम्न शब्द का स्त्रीलिंग लिखो।

अध्यापक \_\_\_\_\_

8. दिए गए शब्द का वचन बदलिए।

(1/2)

झोपड़ी \_\_\_\_\_

9. विलोम शब्द लिखो। (1/2)

सवाल × \_\_\_\_\_

10. भिन्न शब्द पर गोला लगाओ।

(1/2)

चाँद , तारा , सूरज , नदी

वर्तनी

1. सही शब्द पर गोला लगाओ।

(1/2)

कीर्मिच

किरमिच

कीरमीच

2. दिये गये अक्षरों से सही शब्द बनाओ।

(1/2)

की चौ र दा \_\_\_\_\_

3. सही विकल्प चुनकर शब्द पूरा करो।

(1/2)

रा \_\_\_\_\_ भं \_\_\_\_\_ र

क) जा , त ख) ज , डा ग) क , प

4. सही स्थान पर 'इ' (ि) की मात्रा लगाओ।

(1/2)

ह सा ब \_\_\_\_\_


5. सही स्थान पर 'ओ' (ओ) की मात्रा लगाओ।

द प हर - \_\_\_\_\_

6. चित्र का सही नाम चुनकर लिखो -

भाघ , बाग





(1/2)

7. शुद्ध शब्द बनाओ - “ कोसिस ”

8. शब्दों को वर्णमाला के क्रम में लगाओ ।

चरवाहा      अकाल      गपशप      महाराज

9. वाक्य में से अनुनासिक शब्द पर गोला लगाओ ।  
चाँद रात में निकलता है ।

10. वाक्य में से अनुस्वार शब्द पर गोला लगाओ ।  
इन्द्रधनुष में सात रंग होते हैं ।

### शब्दावली

1. पर्यायवाची शब्द लिखिए ।

(1)

बारिश - \_\_\_\_\_, \_\_\_\_\_

2. संयुक्त अक्षर वाले शब्द लिखिए ।

(1)

3. ल्ल - \_\_\_\_\_

3. शब्दों के दो अर्थ लिखो और वाक्य बनाओ ।

जल \_\_\_\_\_

वाक्य \_\_\_\_\_

जल \_\_\_\_\_

वाक्य \_\_\_\_\_

4.- वाक्य में प्रयोग करो।

मुलाकात \_\_\_\_\_

5. नीचे दिए गए शब्द का अर्थ लिखिए ।

गर्मजोश - \_\_\_\_\_

6. निम्न वाक्य के लिए एक शब्द लिखो -

जो हमें पढ़ाता है - \_\_\_\_\_

7. मिलते जुलते शब्द लिखिए -

गालो - \_\_\_\_\_

8. चार दिशाओं के नाम लिखिए -

### क्रियात्मक लेखन



चित्र को देखकर उससे संबंधित पाँच वाक्य लिखो।

1- \_\_\_\_\_

2- \_\_\_\_\_

3- \_\_\_\_\_

4- \_\_\_\_\_

5- \_\_\_\_\_

## सुलेख

संसार भर में सबसे ऊँचा पर्वत हिमालय है। इसका सबसे ऊँचा शिखर 'माउण्ट एवरेस्ट' के नाम से प्रसिद्ध है। इसका प्राचीन नाम गौरीशंकर है। इसका नाम 'माउण्ट एवरेस्ट' कर्नल एवरेस्ट के नाम से पड़ा है। क्योंकि उन्होंने सर्वप्रथम यहां पहुंचने का प्रयास किया था।

---

---

---

**EVS**

**VSA**

**Based on your observation of a construction site, write the people involved :**



1. \_\_\_\_\_ create the building plan .
2. \_\_\_\_\_ complete the whitewashing and painting work of the building.
3. \_\_\_\_\_ bring sand / bricks on trolley.
4. \_\_\_\_\_ are involved in construction of mud / multi-storied house.

Read the report from the news paper and answer the following

**“Clean Ganges project underway to up dolpin population.”**

The Ministry of Environment and Forests is planning to roll up its sleeves and get down to cleaning the Ganges river in order to revive the river’s fresh water dolphin population, Union minister for environment and forests has announced during his visit to the crocodile bank on the East Cost road outside Chennai.

1. Write the full form of MOEF \_\_\_\_\_
2. An animal which lives in fresh water ( reported here) is \_\_\_\_\_
3. The Capital of Tamil Nadu is \_\_\_\_\_
4. Minister visited the \_\_\_\_\_ on the East Cost road outside Chennai.

**1. Name two air transport and water transport that you have seen.**

a) Air transport

\_\_\_\_\_

b) Water transport

\_\_\_\_\_

**2. Name any two occasions when flowers are used.**

a) \_\_\_\_\_ b) \_\_\_\_\_

**Draw and colour a pookkalam**

## IDENTIFICATION AND CLASSIFICATION

Choose the correct answer given in bracket and fill in the blanks :

( Tiny holes , cricket , Chipko , Tunnel , Hot , Vallam )

1. A river can be crossed by a \_\_\_\_\_
  2. Camel can move easily on \_\_\_\_\_ sand .
  3. Virat Kohli is associated with \_\_\_\_\_
  4. Birds hear by the \_\_\_\_\_ on the both sides of the head.
  5. A short railway passage through mountain is known as \_\_\_\_\_
  6. Hugging trees to protect them is \_\_\_\_\_ movement.
1. Write any two differences between indoor and out door games

---

---

---

---

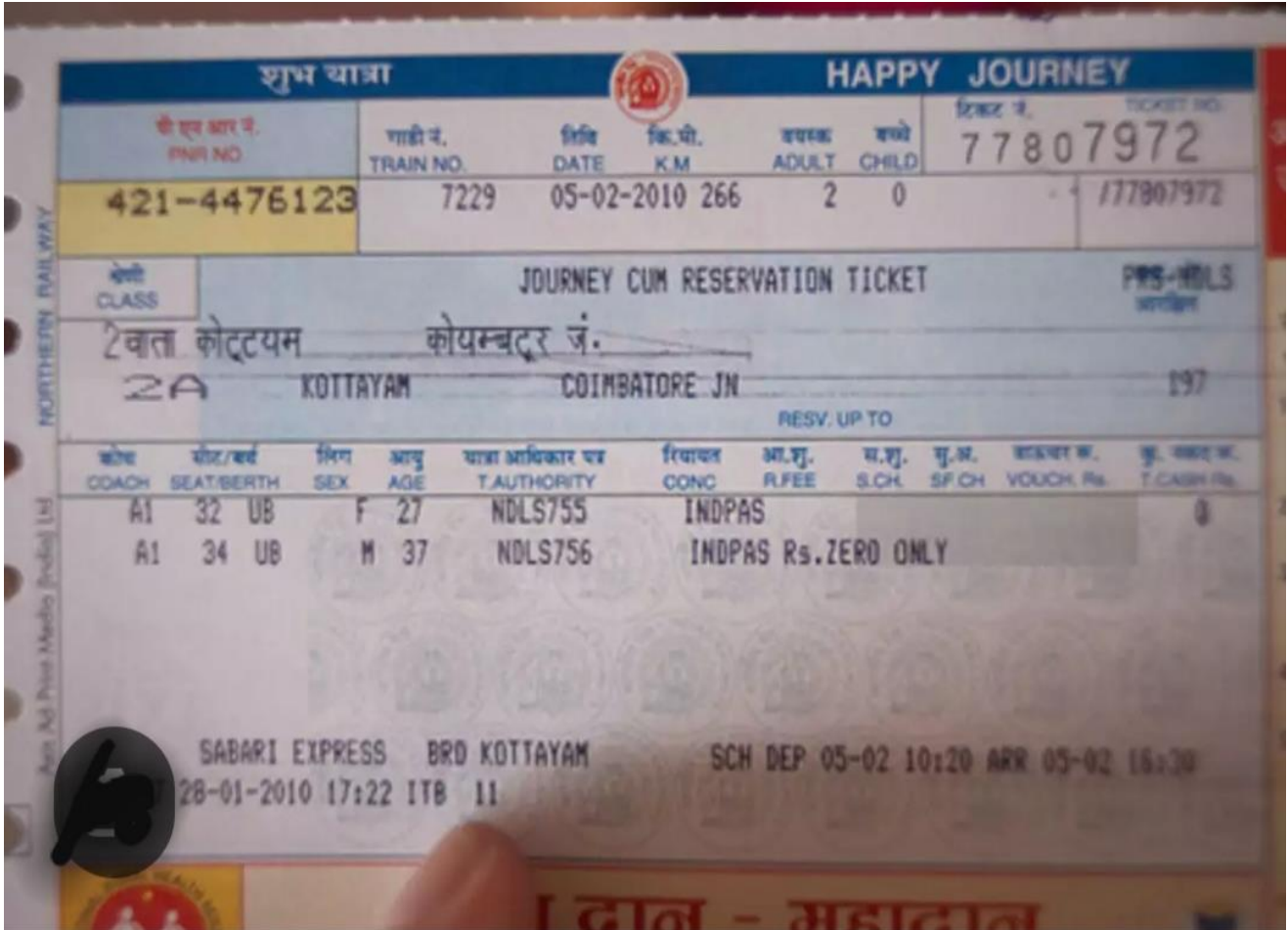
2. Classify the given flowers as flowers used make medicine and perfume

Jasmine	Neem	Rose	Murunga
Hibiscus	Lavender	Lily	Banana

medicine

perfume

1. Look at the ticket carefully and answer the following questions



- The date of journey is \_\_\_\_\_
- Name of the train is \_\_\_\_\_
- The PNR number is \_\_\_\_\_
- The journey is from \_\_\_\_\_ to \_\_\_\_\_

2. Write the differences between Mud house and Cement house

\_\_\_\_\_

### DISCOVERY OF FACTS

- \_\_\_\_\_ is used to make Itr because of its \_\_\_\_\_

2. If you don't switch off your vehicle at the level crossing, it will cause

- a) noise pollution and water pollution
- b) wastage of fuel and time
- c) air and noise pollution
- d) wastage of time and money

3. We cannot drink untreated sea water because it has \_\_\_\_\_ and \_\_\_\_\_

1. Why does the colour of river water change from place to place ?.

---

---

2. Draw a flower and label its parts.

1. a) Why is the Madhubani art famous ?

---

---

b) Draw and colour a sample of Madhubani art

2. Mark the states in the Indian political map

- a) State in which people speak Marathi
- b) State where Valley of flowers is situated
- c) The state in which Sohna village is located
- d) Karanam malleswari belongs to this state



## MATHS

1. How many edges does a cuboid have \_\_\_\_\_.
2. Water in a glass is measured in \_\_\_\_\_.
3. One lakh = \_\_\_\_\_ thousands.  
(a) 10 (b) 100 (c) 1000 (d) 10000
4. If a number is subtracted from itself then the result is \_\_\_\_\_.
5. Complete it.

$$\boxed{\phantom{000}} + 300\text{ml} = \boxed{\text{One litre}} + 60\boxed{\phantom{000}} \quad \boxed{600\text{ml}}$$

6. Using the digits 6,4,8,5. Find
  - (a) Greatest 4 digit number \_\_\_\_\_
  - (b) Smallest 4 digit number \_\_\_\_\_



7. Fill in the boxes.

How many times the container will be used to measure	1 L	500ml	200ml	100ml	50ml
1 L 650ml oil					
850 ml milk					
3 L 450 ml water					
450 ml juice					

8. The place value of 6 in 46028 is \_\_\_\_\_.

9. What time is half past 8 \_\_\_\_\_.

10. 12 notes of Rs 5 is \_\_\_\_\_.

11. How many minutes are there in 2 hours \_\_\_\_\_.

12. Write two activities for which you use more than one litre of water at a time.

a. \_\_\_\_\_

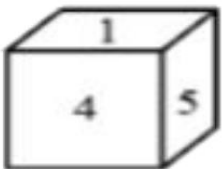
b. \_\_\_\_\_

13. Draw the picture of your shoe from the side and top view.

Side view

top view

--	--



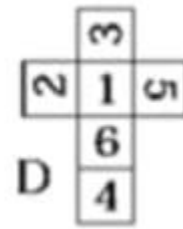
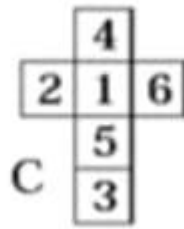
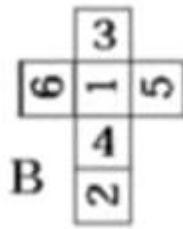
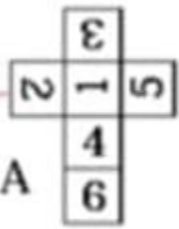
14. Look at the dice and find the following answer.

a. Which will be on opposite side of 5.


b. In the picture, which number will be at the bottom.

c. Which number will be on the opposite side of 4.

d. How will the box look like if you open it up. Tick the correct option.



15. See the clock and fill in the boxes.



	Minute Past	
	Minute to	

16. Do the multiplication in expanded form.

$$922 \times 7$$

17. What date it will be.

a. 6 days before republic day. \_\_\_\_\_

b. 20 days after 24<sup>th</sup> may. \_\_\_\_\_

18. 1 litre of water is collected in 1 hour from a leaking tap. How many litres of water will be collected in

a. 1 day. \_\_\_\_\_

b. 1 week \_\_\_\_\_

c. 1 month \_\_\_\_\_

d. 1 year \_\_\_\_\_

## PROBLEM SOLVING ABILITY

19. Subodh and Chandu start from the same place. Subodh goes 28km north to Sitapur . Chandu goes 48 km in opposite direction to Rampur . Find the following

- In which direction Chandu is going. \_\_\_\_\_
- How far is Rampur from Sitapur. \_\_\_\_\_

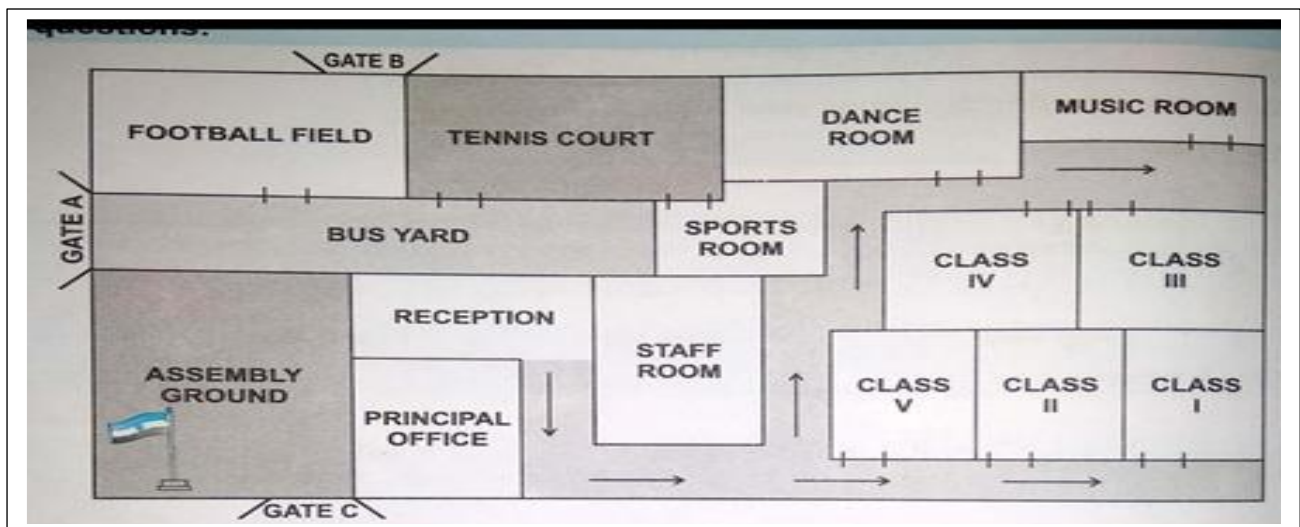
20. Rohit went to a grocery shop. The price list is as below.

- 1 kg sugar = Rs 60
- 1 kg rice. = Rs74
- 1 kg salt = Rs 18
- 1 kg ghee = Rs 573

He bought 3kg sugar, 2 kg salt, 1 kg ghee and 4 kg rice. If Rohit gave Rs 1500. how much money he get?

21 . See the given map and answer the questions

- Which class is between class v and class I. \_\_\_\_\_.
- what is to the right of football field. \_\_\_\_\_.
- Give directions from staffroom to music room. \_\_\_\_\_.





Prepare 4 flash cards (post card size) depicting some fractions and laminate it.

Flash card should be in postcard size

(14 cm length

9 cm breadth)