

**KENDRIYA VIDYALAYA AFS SULUR
HOLIDAY HOMEWORK
CLASS V**

**LEARN AND WRITE THE FOLLOWING WORDS IN TAMIL , HINDI AND ANY
OTHER REGIONAL LANGUAGE**

**YOUR NAME , GOOD MORNING , THANK YOU, WELCOME , HOW ARE YOU, I WILL
DO BETTER**

ENGLISH

READING COMPREHENSION

Four young men lived in a temple. They were talkative. One day one of them said, "We talk too much. We should learn to be quiet". So they decided not to speak to each other for seven days. On the first day no one spoke. When night fell, the lamps in the temple had to be lit. One young man said to the servant, "Light the lamp". The second man was surprised. He said, "We had decided not to say a word and now you have spoken". "You both are foolish. Why did you talk?" said the third young man. "I am the only one who has not spoken" said the fourth young man. So before the day ended, all the four young men had spoken. They could not keep quiet even for a single day.

1. Give one word for -

The habit of talking too much - _____

2. Spot and write two words from the passage that have two vowels in them

3. For how many days were they able to be quiet?

4. How could they have lit the lamp without talking?

5. Write the opposite of

Old x _____

Dark x _____

Answer the following questions:

1. Express your feelings when you see an ice-cream man. (Ice-cream man)

2. Your friend and you are playing outside; suddenly you notice your shadows are almost not seen. Can you tell what time of the day it is? (My shadow)

3. Who do you like more Bhaiya or Munna? Give the reason why.

4. How can you help Rip to maintain his farm?

Do as directed:

1. I don't know _____ he will come back. (Complete with a **'WH'** word)

2. Sudhir was present there _____ nobody noticed him. (Complete with a **conjunction**)

3. Jolly has lived in Mumbai _____ four years but her company has been there _____ 1960.

(Complete using **for/since**)

1. Train is _____ best option to travel to Mathura. (Fill the blanks with article **a/an/the**)

2. Cotton is the _____ (soft) material. (Fill with appropriate degree of adjective)

3. i dont know where mohan lives (Punctuate the above)

4. and clean neat room her always is

(Rearrange the jumbled words to make a meaningful sentence)

1. She's _____ I'm _____ (write the **full form** of)

The teacher shouted _____ (loud / loudly). (Choose the correct option)

The _____ (goose) sat on the _____ (branch) of the tall tree.

(Fill using the plurals of the given words)

SPELLING

1. Colour the correct spelling.

Shadoo

shadow

scadow

Destroi

distroy

destroy

2. Complete the words using 'ai/ic'

adv _ _ e

afr _ _ d

3. Rearrange the jumbled letters to make a meaningful word.

1M

oofillhs- _____ (at the base of a mountain)

lafppde- _____ (move wings up and down)

4. Correct the wrongly spelt word

The cook vipped some curd and added it to the curry.

5. Do as directed:

a) Circle the words that start with the same sound

Three grey geese in a green field grazing. Grey were the geese and green was the grazing.

b) Write the word that sounds like the given

/kum'pan - yun/ - _____

VOCABULARY

1. Ice cream is cold, sweet and creamy. How is a cup of coffee?

Steamy

refreshing

sour

sweet

2. Circle the silent letter in the given words

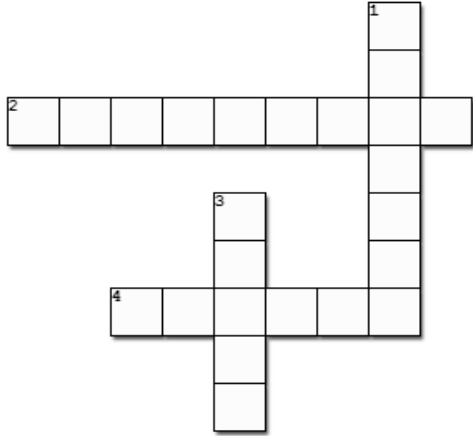
Daughter

knife

3. Make two new words (4 or 5 letter word) using the letters in the given word.

TEAMWORK

4. Complete the crossword puzzle below



Across:

2. Joy; being very happy

4. Extremely wet


Down:

1. To move from a higher to a lower place; come or go down.

3. A grand meal

CREATIVE WRITING

Create a story using the given picture.



HANDWRITING

Read the following passage and write in cursive hand on the below given lines.

The Himalayas are a wonderful line of mountains. The mountains are huge, steep and snow white. If you see them, you will never forget their beauty. Sometimes we call the Himalayas 'the roof of the world' because they are the highest mountains on earth. In 1852, the Survey of India measured the height of the mountains. It found that Mount Everest was the highest mountain in the world.

HINDI

अपठित गद्यांश

पुस्तकालय का अर्थ है - पुस्तकें रखने का घर अर्थात् जहाँ एक ही जगह पर एक साथ बहुत सारी पुस्तकें रखी जाती है। हर स्कूल और कॉलेज में पुस्तकालय होता है। जो लोग नौकरी करते हैं , उन लोगों के लिए भी पुस्तकालय होता है। इसे पब्लिक लाइब्रेरी कहा जाता है। पुस्तकालय में न केवल पुस्तकें होती है, बल्कि अखबार, पत्र-पत्रिकाएँ आदि भी होती है। पुस्तकालय में बैठकर लोग अपनी मनपसंद पुस्तकें, पत्र-पत्रिकाएँ, अखबार आदि पढ़ते हैं। हमारे विद्यालय में “आओ ज्ञान बढ़ाए” नामक एक बड़ा सा पुस्तकालय है। इसमें हिंदी, अंग्रेजी, गणित, संस्कृत, फ्रेंच, जर्मनी आदि विषयों की लगभग 6000 पुस्तकें है। यहाँ पर विभिन्न भाषाओं के शब्द -कोष , पत्र-पत्रिकाएँ आदि भी है। पुस्तकालय में बैठकर पढ़ने के साथ पुस्तकों को घर ले जाकर पढ़ने की सुविधा भी होती है ।

क) अपठित गद्यांश के आधार पर निम्न प्रश्नों के उत्तर दीजिए:-

1. पुस्तकालय का क्या अर्थ है?

2. पुस्तकालय कहाँ-कहाँ होते हैं?

3. नौकरी करने वाले लोगों के पुस्तकालय को क्या कहते हैं?

4. गद्यांश में बताए गए हमारे विद्यालय के पुस्तकालय का क्या नाम है?

5. पुस्तकालय में पुस्तकों के अलावा क्या - क्या चीजें मिलती हैं?

6. पुस्तकालय जाकर आप कौन सी किताब पढ़ना पसंद करोगे?

7. गद्यांश का उचित शीर्षक लिखिए।

8. 'पुस्तकालय' को अंग्रेजी में क्या कहते हैं ?

पाठ्य पुस्तक प्रश्न उत्तर

1. बच्चा बड़ा होकर कैसा बनना चाहता था ?

2. "एक माँ की बेबसी" कविता किसने लिखी ?

3. सन् 2155 में स्कूल कैसे होंगे?

4. जहाँ चाह वहाँ राह" की कहानी से हमें क्या शिक्षा मिलती है?

व्याकरण

1.संज्ञा शब्द पर गोला लगाओ:

रामायण एक धार्मिक पुस्तक हैं ।

2.विशेषण शब्द पर गोला लगाओ:

राधा सुंदर लड़की है।

3 मुहावरे का अर्थ लिखो:

उलटे पाँव लौटना :

4 रेखांकित शब्द का अन्य लिंग लिखो -

अध्यापक और _____ कक्षा में पढ़ा रहे थे

5. सर्वनाम शब्द को रेखांकित करें-

मोहन एक लड़का है। वह दूसरी कक्षा में पढ़ता है।

6. सही वाक्य बनाओ:-

फुटबॉल / मैं / हूँ। / खेलता/ से -----

7.सही कारक चिन्ह का प्रयोग करके वाक्य को पूरा करो।

राम___ रावण को मारा। (से/ ने के / में)

8. क्रिया शब्द पर गोला लगाओ :

पिताजी अखबार पढ़ रहे है।

9.एकवचन में बदलो :-

घंटियाँ - ----- आँखें - -----

10. सही दो शब्द शब्द बने चुनकर वाक्य पूरा करो.

मोहन परिश्रमी है, प्रथम आया । (क्योंकि / इसलिए)

वर्तनी

1. सही मात्रा लगा कर शब्द बनाओ :-

परस्कार भयभ॑त

2. वर्तनी शुद्ध करो :-

निरास मुसकिल

3. सही वर्तनी चुनो :-

मशहूर मसहूर मषहूर

प्राकृति प्रकृति प्रक्रति

4. अनुस्वार लगाएँ :-

सगतराश पाबदी

5. सही संयुक्ताक्षर लगाकर शब्द बनाओ :-

अतिरि॑~(म्त /क्त) मह॑~ (त्व / प्व)

शब्द-कोष

1 दो तुक वाले शब्द लिखो :-

मिला - -----

2..विलोम शब्द लिखो :-

कठिन X ----- शुभ X -----

3. इन्हें क्या कहते हैं?

गंगा, यमुना, कावेरी- -----

अमेरिका , चीन, भारत- -----

4. चित्र देखकर नाम लिखो :-





5. सही वर्णमाला क्रम में लिखो :-

हूमर , सफ़र , चिमटा - ----- रात , नाक
, पानी - -----

सृजनात्मक लेखन

1 . नीचे दिए गए चित्र को देखकर पांच से आठ वाक्य लिखे ।



सुलेख

समय पृथ्वी पर सबसे कीमती वस्तु है। इसकी तुलना किसी से भी नहीं की जा सकती है। यदि एक बार यह चला जाए, तो कभी वापस नहीं आता। इस संसार में सब कुछ समय पर निर्भर करता है, समय से पहले कुछ भी नहीं होता है। समय बहुत अनमोल है।

EVS


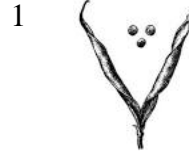
I. Based on observation and write the answer.

1. An area reserved by the government to preserve plants and animals.
2. A place where things of historical importance are exhibited.
3. The traditional water storage tanks used to conserve rain water in Rajasthan.
4. The dried powder made from bark of this tree is used to make medicine for malaria.

II. Write any two things that sink in water.

III. Write food items rich in iron.

IV. write the ways in which these seeds spread.



V. Clothes dry up faster on sunny day than on a cloudy day?

Give reason

Answer the following questions:

1. Why water is called universal solvent?

2. What is rapling?

I. Choose the correct answer

1. _____ type of medicine is to be given in case of a snake bite.

(Antibiotic / anti venom)

2. Big guns are made up of _____.

(Bronze / wood)

3. The normal range of hemoglobin is _____

(a) 8 to 18 gm/ dl (b) 12 to 16 gm / dl

Find the word in the grid with the help of clues given below:

4. Down: Leather bags used to carry water.

5. Across: This water animal makes different sounds to give messages to each other.

6. Across: An adventurous sports – use of inflatable boat.

m	r	s	e	m	e	s
a	a	t	w	a	r	e
d	f	e	v	s	e	h
d	o	l	p	h	i	n
e	j	n	y	a	n	d
s	n	e	a	k	e	n
r	a	f	t	i	n	g

II. Answer the following questions:

1. a) Write the name of this famous mountaineer?


b) Write about her special achievement.

2. Write steps for making **MAMIDI TANDRA**.




III. Answer in detail:

1 a) Name the fort shown in the picture



b) Write 3 sentences about the architecture of the fort.

2. a) Name the India's latest spacecraft sent to moon .



b) Will the space travel become easy, fast and cheap?

c) Why do astronauts wear special suits

I. Match the following:

- | | | | |
|----|------------------|---|-----------|
| 1. | Female anopheles | - | Meteorite |
| 2. | Salt + Water | - | Milk |
| 3. | Pitcher plant | - | Rangoli |
| 4. | Naag gumphan | - | Malaria |
| 5. | Pasteurization | - | Solution |
| 6. | Shooting star | - | Nepenthes |

II. Give reason:

1. A tiger's sense of hearing is very sharp.

2. Why do we have to preserve monuments?

III. Answer in detail:

a) Make a poster with the message to keep your surroundings clean



b) Write few steps which help in controlling mosquitoes.

- IV. 1. On the political map of India Mark the following:
- a. The Golkonda fort is situated in this state of India.
 - b. Nehru institute of mountaineering is situated here.
 - c. Kalbeliya dance is famous here.
 - d. Kalahandi district is located in this state .
 - e. Mamadi Thandra is popular in this state of India.
 - f. Mark a National park which is famous for one horned Rhinoceros.
2. Mark the states where these national Parks are located.
- g. Gir National park
 - h. Periyar National park

MATHS

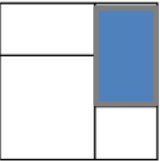
Very Short Answer

1. The total length of the boundary is called _____

2. Write the place value of the underlined digits

a) 5032189 - _____

b) 96645821 - _____

3.  Fraction of the shaded part is

a) $\frac{1}{4}$

b) $\frac{1}{2}$

c) $\frac{3}{4}$

d) can't write

4. Write in words.


a) 54400215 - _____

b) 325784500 - _____

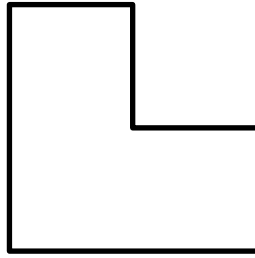
Short Answer

5. Mark all the angles in the given shapes

a)



b)



Long Answer (1 x 4 = 4 marks)

6. a) Draw mirror halves of the following




b) Write the multiples of the even prime number

Very Short Answer (4 x 1 = 4 marks)

1. 13 kg = _____ g

2. $\frac{3}{10} = \frac{\square}{20} = \frac{\square}{30}$

3. Draw a line of symmetry for the following shapes



4. Area will be measured in _____

a) units

b) cubic units

c) square units

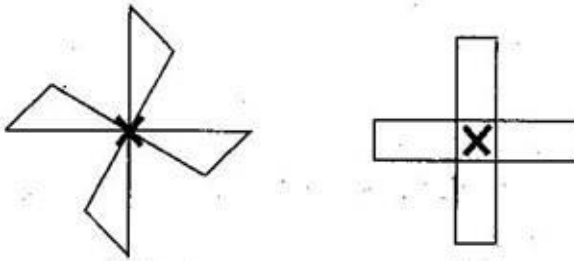
d) cm only

Short Answer

5. Draw a clock whose hands form acute angle and write the time and angle ($^{\circ}$)

Long Answer

6. a)



If the above shapes look the same on $\frac{1}{4}$ and $\frac{1}{2}$ turns, make changes to make them look the same only on $\frac{1}{2}$ turn.



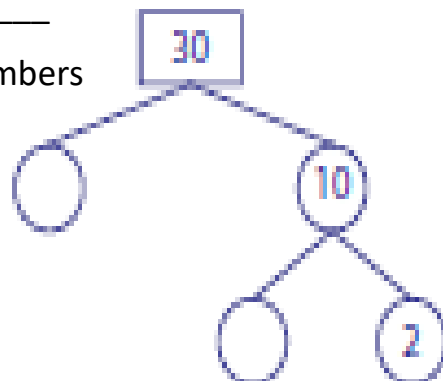
Complete the pattern and write the rule of the pattern _____

C. ABILITY TO COMPUTE

Very Short Answer

1. Area of a rectangle is 20 cm. sq. If the width is 4cm, what is the length _____

2. Write the missing numbers



Short Answer

3. Construct an angle of 45°

4. a) 275, 265, 245, 215, _____, _____

b) 2, 5, 11, 23, _____, _____

Long Answer

5. a) Make a magic square using numbers from 11 to 19

b) Find HCF of 32 and 56

Short Answer

1. A big fish was sold for Rs.2400. What was the weight of the fish, if 1kg of the fish was Rs.300?

Long Answer

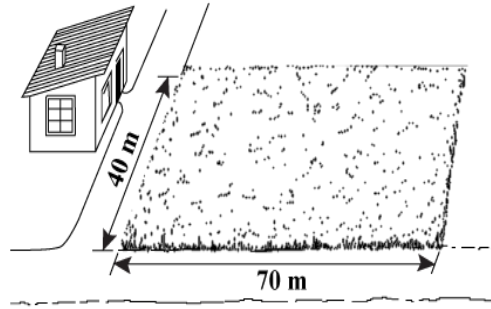
2. There are 10 classes in a school with 4 sections in each class. Each section has 50 students. $\frac{4}{10}$ of the total students are boys. Find the following.

a. How many boys are there?

b. How many girls are there in the school?

c. Half of the girls like pink colour. Find how many?

3. What would be the cost of fencing the given field at Rs. 200 per m.



Prepare 4 flash cards (post card size) depicting fractions of

$\frac{1}{10}$,

$\frac{1}{100}$

$\frac{1}{1000}$ (paste graph paper for this)

Then,Laminate it